

## NTA NIFT FEB 2025 ENTRANCE EXAM\_ 9TH FEB 2025

Application No	
Candidate Name	
Roll No.	
Test Date	09/02/2025
Test Time	9:00 AM - 12:00 PM
Subject	BDES

### Section : Communication Ability And English Comprehension

#### Comprehension:

**Read the following passage carefully and answer the questions that follow:**

The colour of animals is by no means a matter of chance; it depends on many considerations, but in the majority of cases the choice tends to protect the animal from danger by rendering it less conspicuous. Perhaps, it may be said that if colouring is mainly protective, there ought to be but few brightly coloured animals. There are, however, not a few cases in which vivid colours are themselves protective. The kingfisher, though so brightly coloured, is by no means easy to spot. The blue harmonizes with the water, and the bird looks almost like a flash of sunlight as it darts along the stream.

Desert animals are generally the colour of the desert. Thus, neither the sparse trees nor the feeble undergrowth such as twigs and small branches provide even the slightest protection from their foes. Hence, a modification, requiring their colour blending with that of their surroundings, is absolutely necessary. Without exception, the upper plumage of every bird and also the skin of all snakes and lizards, is of one uniform sand colour.

The next point is the colour of mature caterpillars, some of which are brown. This probably makes the caterpillar even more conspicuous among the green leaves than would otherwise be the case. Let us see, then, whether the habits of the insect can protect it.

What would you do if you were a big caterpillar? Why, like most other defenceless creatures, you would feed by night, and lie concealed by day. So do these caterpillars. When the morning light comes, they creep down the stem of the food plant, and lie concealed among the thick foliage, dry sticks and leaves, near the ground, and it is obvious that under such circumstances the brown colour really serves as protection.

#### SubQuestion No : 1

**Q.1** After reading the passage carefully identify the **incorrect** statement.

- Options**
1. Some of the caterpillars are brown and some are grey.
  2. The colour brown makes the caterpillar stand out in its natural habitat.
  3. Caterpillars hide themselves under thick foliage in the daytime.
  4. Caterpillars feed by night.

Question Type : **MCQ**

Question ID : **531002211**

Option 1 ID : **531002814**

Option 2 ID : **531002816**

Option 3 ID : **531002815**

Option 4 ID : **531002813**

Status : **Marked For Review**

Chosen Option : **1**

**Comprehension:**

**Read the following passage carefully and answer the questions that follow:**

The colour of animals is by no means a matter of chance; it depends on many considerations, but in the majority of cases the choice tends to protect the animal from danger by rendering it less conspicuous. Perhaps, it may be said that if colouring is mainly protective, there ought to be but few brightly coloured animals. There are, however, not a few cases in which vivid colours are themselves protective. The kingfisher, though so brightly coloured, is by no means easy to spot. The blue harmonizes with the water, and the bird looks almost like a flash of sunlight as it darts along the stream.

Desert animals are generally the colour of the desert. Thus, neither the sparse trees nor the feeble undergrowth such as twigs and small branches provide even the slightest protection from their foes. Hence, a modification, requiring their colour blending with that of their surroundings, is absolutely necessary. Without exception, the upper plumage of every bird and also the skin of all snakes and lizards, is of one uniform sand colour.

The next point is the colour of mature caterpillars, some of which are brown. This probably makes the caterpillar even more conspicuous among the green leaves than would otherwise be the case. Let us see, then, whether the habits of the insect can protect it.

What would you do if you were a big caterpillar? Why, like most other defenceless creatures, you would feed by night, and lie concealed by day. So do these caterpillars. When the morning light comes, they creep down the stem of the food plant, and lie concealed among the thick foliage, dry sticks and leaves, near the ground, and it is obvious that under such circumstances the brown colour really serves as protection.

**SubQuestion No : 2**

**Q.2 What is the primary subject of the passage?**

**Options** 1. The planting of more trees and vegetation.

2.

That the colour of birds and animals is mostly adapted to match the background of their environment.

3. That the colouration of a bird or an animal is irrelevant.

4. The conservation of wildlife.

Question Type : **MCQ**

Question ID : **531002212**

Option 1 ID : **531002818**

Option 2 ID : **531002820**

Option 3 ID : **531002819**

Option 4 ID : **531002817**

Status : **Marked For Review**

Chosen Option : **2**

**Comprehension:**

**Read the following passage carefully and answer the questions that follow:**

The colour of animals is by no means a matter of chance; it depends on many considerations, but in the majority of cases the choice tends to protect the animal from danger by rendering it less conspicuous. Perhaps, it may be said that if colouring is mainly protective, there ought to be but few brightly coloured animals. There are, however, not a few cases in which vivid colours are themselves protective. The kingfisher, though so brightly coloured, is by no means easy to spot. The blue harmonizes with the water, and the bird looks almost like a flash of sunlight as it darts along the stream.

Desert animals are generally the colour of the desert. Thus, neither the sparse trees nor the feeble undergrowth such as twigs and small branches provide even the slightest protection from their foes. Hence, a modification, requiring their colour blending with that of their surroundings, is absolutely necessary. Without exception, the upper plumage of every bird and also the skin of all snakes and lizards, is of one uniform sand colour.

The next point is the colour of mature caterpillars, some of which are brown. This probably makes the caterpillar even more conspicuous among the green leaves than would otherwise be the case. Let us see, then, whether the habits of the insect can protect it.

What would you do if you were a big caterpillar? Why, like most other defenceless creatures, you would feed by night, and lie concealed by day. So do these caterpillars. When the morning light comes, they creep down the stem of the food plant, and lie concealed among the thick foliage, dry sticks and leaves, near the ground, and it is obvious that under such circumstances the brown colour really serves as protection.

**SubQuestion No : 3**

**Q.3** Choose the most appropriate meaning of the word 'conspicuous', used twice in the passage.

- Options
1. Sluggish
  2. Invisible
  3. Immobile
  4. Noticeable

Question Type : **MCQ**

Question ID : **531002208**

Option 1 ID : **531002802**

Option 2 ID : **531002804**

Option 3 ID : **531002801**

Option 4 ID : **531002803**

Status : **Marked For Review**

Chosen Option : **4**



**Comprehension:**

**Read the following passage carefully and answer the questions that follow:**

The colour of animals is by no means a matter of chance; it depends on many considerations, but in the majority of cases the choice tends to protect the animal from danger by rendering it less conspicuous. Perhaps, it may be said that if colouring is mainly protective, there ought to be but few brightly coloured animals. There are, however, not a few cases in which vivid colours are themselves protective. The kingfisher, though so brightly coloured, is by no means easy to spot. The blue harmonizes with the water, and the bird looks almost like a flash of sunlight as it darts along the stream.

Desert animals are generally the colour of the desert. Thus, neither the sparse trees nor the feeble undergrowth such as twigs and small branches provide even the slightest protection from their foes. Hence, a modification, requiring their colour blending with that of their surroundings, is absolutely necessary. Without exception, the upper plumage of every bird and also the skin of all snakes and lizards, is of one uniform sand colour.

The next point is the colour of mature caterpillars, some of which are brown. This probably makes the caterpillar even more conspicuous among the green leaves than would otherwise be the case. Let us see, then, whether the habits of the insect can protect it.

What would you do if you were a big caterpillar? Why, like most other defenceless creatures, you would feed by night, and lie concealed by day. So do these caterpillars. When the morning light comes, they creep down the stem of the food plant, and lie concealed among the thick foliage, dry sticks and leaves, near the ground, and it is obvious that under such circumstances the brown colour really serves as protection.

**SubQuestion No : 4**

**Q.4 Identify the incorrect statement from the passage:**

- Options**
1. It is by no means easy to see the kingfisher.
  2. The kingfisher looks like a flash of sunlight when it darts along the stream.
  3. The kingfisher is a brightly coloured bird.
  4. The kingfisher has a green coloured ring around the neck.

Question Type : **MCQ**

Question ID : **531002209**

Option 1 ID : **531002807**

Option 2 ID : **531002808**

Option 3 ID : **531002805**

Option 4 ID : **531002806**

Status : **Marked For Review**

Chosen Option : **4**

**Comprehension:**

**Read the following passage carefully and answer the questions that follow:**

The colour of animals is by no means a matter of chance; it depends on many considerations, but in the majority of cases the choice tends to protect the animal from danger by rendering it less conspicuous. Perhaps, it may be said that if colouring is mainly protective, there ought to be but few brightly coloured animals. There are, however, not a few cases in which vivid colours are themselves protective. The kingfisher, though so brightly coloured, is by no means easy to spot. The blue harmonizes with the water, and the bird looks almost like a flash of sunlight as it darts along the stream.

Desert animals are generally the colour of the desert. Thus, neither the sparse trees nor the feeble undergrowth such as twigs and small branches provide even the slightest protection from their foes. Hence, a modification, requiring their colour blending with that of their surroundings, is absolutely necessary. Without exception, the upper plumage of every bird and also the skin of all snakes and lizards, is of one uniform sand colour.

The next point is the colour of mature caterpillars, some of which are brown. This probably makes the caterpillar even more conspicuous among the green leaves than would otherwise be the case. Let us see, then, whether the habits of the insect can protect it.

What would you do if you were a big caterpillar? Why, like most other defenceless creatures, you would feed by night, and lie concealed by day. So do these caterpillars. When the morning light comes, they creep down the stem of the food plant, and lie concealed among the thick foliage, dry sticks and leaves, near the ground, and it is obvious that under such circumstances the brown colour really serves as protection.

**SubQuestion No : 5**

- Q.5** After reading the passage carefully, select the **correct** answer to the following question.  
Why is 'colour blending' important for the desert animals?

- Options**
1. As food and water are scarce in the desert.
  2. As the colour of the desert changes during daytime.
  3. As the sparse trees or feeble undergrowth offer little natural protection.
  4. As the kingfishers are quick to dart into bushes.

Question Type : **MCQ**

Question ID : **531002210**

Option 1 ID : **531002809**

Option 2 ID : **531002811**

Option 3 ID : **531002810**

Option 4 ID : **531002812**

Status : **Marked For Review**

Chosen Option : **3**

**Comprehension:**

**Read the given passage carefully and answer the questions that follow:**

The fashion industry has seen a rise in alternative leather options, from fish skin to pineapple leaves to cork leather. High-end fashion brands like John Galliano, Prada, and Christian Dior have dabbled in fish skin options for their products; the practice itself has roots dating back centuries to multiple indigenous groups across the globe. Brands like Nanushka and Hugo Boss, meanwhile, have sought to use leather alternatives that are completely vegan.

Sustainable fashion aims to reduce pollution and waste in the manufacturing process while addressing overproduction and cutting down on CO<sub>2</sub> emissions. Sustainability is a complex concept, and faux leather only plays one part in the machine of sustainable fashion. While brands like Allbirds and Sojo have been transparent in addressing their environmental impacts, other brands have participated in greenwashing, promoting products as eco-friendly to consumers without actually improving their practices.

Vegan leather made from plastic materials like PVC and PU can still be harmful to the environment. But when made from natural materials, plant-based leathers make for great eco-friendly options. Additionally, vegan leather's lifespan is much shorter than real leather, so consider how often you'll be replacing this product when you do purchase it. Real leather does lead to high carbon emissions, but there are ways of making this kind of purchase a sustainable one. Taking good care of the product over time is essential. You can also aim to purchase your next leather good as a meat by-product with vegetable tanning, or from a producer that works with small farms.

Both forms of leather have ways to go in terms of sustainability, but by making an informed decision on your next leather purchase, whether it's vegan or not, you can contribute to their environmental impact.

**SubQuestion No : 6**

**Q.6** Choose the most appropriate title for the given passage.

**Options**

1. Indigenous Practices and Techniques: The Path to Sustainability

2. The Pitfalls of the Sustainable Fashion Industry

3. Real Leather: The Future of the Fashion Industry

4. Making a Sustainable Choice: The Case of Leather and its Alternatives

Question Type : **MCQ**

Question ID : **531002218**

Option 1 ID : **531002837**

Option 2 ID : **531002838**

Option 3 ID : **531002839**

Option 4 ID : **531002840**

Status : **Marked For Review**

Chosen Option : **4**



**Comprehension:****Read the given passage carefully and answer the questions that follow:**

The fashion industry has seen a rise in alternative leather options, from fish skin to pineapple leaves to cork leather. High-end fashion brands like John Galliano, Prada, and Christian Dior have dabbled in fish skin options for their products; the practice itself has roots dating back centuries to multiple indigenous groups across the globe. Brands like Nanushka and Hugo Boss, meanwhile, have sought to use leather alternatives that are completely vegan.

Sustainable fashion aims to reduce pollution and waste in the manufacturing process while addressing overproduction and cutting down on CO<sub>2</sub> emissions. Sustainability is a complex concept, and faux leather only plays one part in the machine of sustainable fashion. While brands like Allbirds and Sojo have been transparent in addressing their environmental impacts, other brands have participated in greenwashing, promoting products as eco-friendly to consumers without actually improving their practices.

Vegan leather made from plastic materials like PVC and PU can still be harmful to the environment. But when made from natural materials, plant-based leathers make for great eco-friendly options. Additionally, vegan leather's lifespan is much shorter than real leather, so consider how often you'll be replacing this product when you do purchase it. Real leather does lead to high carbon emissions, but there are ways of making this kind of purchase a sustainable one. Taking good care of the product over time is essential. You can also aim to purchase your next leather good as a meat by-product with vegetable tanning, or from a producer that works with small farms.

Both forms of leather have ways to go in terms of sustainability, but by making an informed decision on your next leather purchase, whether it's vegan or not, you can contribute to their environmental impact.

**SubQuestion No : 7****Q.7 What is the central argument of the passage?****Options**

1. The passage advocates the use of vegan leather and leather alternatives as they last for a long time and do not need to be replaced. This affects the profit margins of companies and slows down growth.

2.

The passage addresses the complexities of sustainability, and advocates the use of leather alternatives. The passage argues that the use of real leather gives rise to animal cruelty, and calls for a worldwide ban.

3.

The passage provides a nuanced perspective on the role of leather in sustainable fashion. It unpacks the environmental impact of different leather alternatives and argues that one must make an informed decision by considering the stage of production and materials used, while purchasing an item.

4.

The passage focuses on the misleading practices that run rampant, in the sustainable fashion industry and advocates the need for complete transparency in addressing the environment.

Question Type : **MCQ**

Question ID : **531002215**

Option 1 ID : **531002827**

Option 2 ID : **531002825**

Option 3 ID : **531002826**

Option 4 ID : **531002828**

Status : **Not Answered**

Chosen Option : --

**Comprehension:**

**Read the given passage carefully and answer the questions that follow:**

The fashion industry has seen a rise in alternative leather options, from fish skin to pineapple leaves to cork leather. High-end fashion brands like John Galliano, Prada, and Christian Dior have dabbled in fish skin options for their products; the practice itself has roots dating back centuries to multiple indigenous groups across the globe. Brands like Nanushka and Hugo Boss, meanwhile, have sought to use leather alternatives that are completely vegan.

Sustainable fashion aims to reduce pollution and waste in the manufacturing process while addressing overproduction and cutting down on CO<sub>2</sub> emissions. Sustainability is a complex concept, and faux leather only plays one part in the machine of sustainable fashion. While brands like Allbirds and Sojo have been transparent in addressing their environmental impacts, other brands have participated in greenwashing, promoting products as eco-friendly to consumers without actually improving their practices.

Vegan leather made from plastic materials like PVC and PU can still be harmful to the environment. But when made from natural materials, plant-based leathers make for great eco-friendly options. Additionally, vegan leather's lifespan is much shorter than real leather, so consider how often you'll be replacing this product when you do purchase it. Real leather does lead to high carbon emissions, but there are ways of making this kind of purchase a sustainable one. Taking good care of the product over time is essential. You can also aim to purchase your next leather good as a meat by-product with vegetable tanning, or from a producer that works with small farms.

Both forms of leather have ways to go in terms of sustainability, but by making an informed decision on your next leather purchase, whether it's vegan or not, you can contribute to their environmental impact.

**SubQuestion No : 8**

- Q.8** According to the passage, which of the following high-end fashion brands have not dabbled in using fish skin options as leather alternative?

- Options**
1. John Galliano
  2. Christian Dior
  3. Nanushka
  4. Prada

Question Type : **MCQ**

Question ID : **531002214**

Option 1 ID : **531002822**

Option 2 ID : **531002824**

Option 3 ID : **531002821**

Option 4 ID : **531002823**

Status : **Marked For Review**

Chosen Option : **3**



**Comprehension:**

**Read the given passage carefully and answer the questions that follow:**

The fashion industry has seen a rise in alternative leather options, from fish skin to pineapple leaves to cork leather. High-end fashion brands like John Galliano, Prada, and Christian Dior have dabbled in fish skin options for their products; the practice itself has roots dating back centuries to multiple indigenous groups across the globe. Brands like Nanushka and Hugo Boss, meanwhile, have sought to use leather alternatives that are completely vegan.

Sustainable fashion aims to reduce pollution and waste in the manufacturing process while addressing overproduction and cutting down on CO<sub>2</sub> emissions. Sustainability is a complex concept, and faux leather only plays one part in the machine of sustainable fashion. While brands like Allbirds and Sojo have been transparent in addressing their environmental impacts, other brands have participated in greenwashing, promoting products as eco-friendly to consumers without actually improving their practices.

Vegan leather made from plastic materials like PVC and PU can still be harmful to the environment. But when made from natural materials, plant-based leathers make for great eco-friendly options. Additionally, vegan leather's lifespan is much shorter than real leather, so consider how often you'll be replacing this product when you do purchase it. Real leather does lead to high carbon emissions, but there are ways of making this kind of purchase a sustainable one. Taking good care of the product over time is essential. You can also aim to purchase your next leather good as a meat by-product with vegetable tanning, or from a producer that works with small farms.

Both forms of leather have ways to go in terms of sustainability, but by making an informed decision on your next leather purchase, whether it's vegan or not, you can contribute to their environmental impact.

**SubQuestion No : 9**

- Q.9** Choose the most appropriate term that refers to the practice of advertising products as eco-friendly without actually adopting concrete measures to improve business practices.

- Options**
1. **Greenwashing**
  2. **Transparency**
  3. **Alternatives**
  4. **Sustainability**

Question Type : **MCQ**

Question ID : **531002217**

Option 1 ID : **531002834**

Option 2 ID : **531002835**

Option 3 ID : **531002836**

Option 4 ID : **531002833**

Status : **Marked For Review**

Chosen Option : **1**

**Comprehension:**

**Read the given passage carefully and answer the questions that follow:**

The fashion industry has seen a rise in alternative leather options, from fish skin to pineapple leaves to cork leather. High-end fashion brands like John Galliano, Prada, and Christian Dior have dabbled in fish skin options for their products; the practice itself has roots dating back centuries to multiple indigenous groups across the globe. Brands like Nanushka and Hugo Boss, meanwhile, have sought to use leather alternatives that are completely vegan.

Sustainable fashion aims to reduce pollution and waste in the manufacturing process while addressing overproduction and cutting down on CO<sub>2</sub> emissions. Sustainability is a complex concept, and faux leather only plays one part in the machine of sustainable fashion. While brands like Allbirds and Sojo have been transparent in addressing their environmental impacts, other brands have participated in greenwashing, promoting products as eco-friendly to consumers without actually improving their practices.

Vegan leather made from plastic materials like PVC and PU can still be harmful to the environment. But when made from natural materials, plant-based leathers make for great eco-friendly options. Additionally, vegan leather's lifespan is much shorter than real leather, so consider how often you'll be replacing this product when you do purchase it. Real leather does lead to high carbon emissions, but there are ways of making this kind of purchase a sustainable one. Taking good care of the product over time is essential. You can also aim to purchase your next leather good as a meat by-product with vegetable tanning, or from a producer that works with small farms.

Both forms of leather have ways to go in terms of sustainability, but by making an informed decision on your next leather purchase, whether it's vegan or not, you can contribute to their environmental impact.

**SubQuestion No : 10**

**Q.10** In the context of the passage, choose the option that includes all the statements that enumerate the ways in which we can make real leather a sustainable choice.

- A. Purchase real leather which has a longer life span when compared to farm leather.
- B. Purchase leather goods as a meat by-product with vegetable tanning.
- C. Purchase leather goods from producers who work with large farms.
- D. Mix real leather with plant based leathers.
- E. Taking good care of leather products over time is essential to prolong their lives.

Choose the correct answer from the options given below.

- Options**
- 1. B, C and D only
  - 2. A, B and E only
  - 3. A, C and D only
  - 4. A, B and C only

Question Type : **MCQ**

Question ID : **531002216**

Option 1 ID : **531002830**

Option 2 ID : **531002831**

Option 3 ID : **531002829**

Option 4 ID : **531002832**

Status : **Marked For Review**

Chosen Option : **2**

**Q.11** Arrange the following parts of a formal letter in the correct order:

- A. subscription
- B. subject
- C. salutation
- D. date
- E. address of addressee

Choose the **correct** answer from the options given below:

- Options**
- 1. D – E – A – B – C
  - 2. A – C – D – E – B
  - 3. B – A – D – C – E
  - 4. E – D – B – C – A

Question Type : **MCQ**

Question ID : **531002244**

Option 1 ID : **531002943**

Option 2 ID : **531002942**

Option 3 ID : **531002944**

Option 4 ID : **531002941**

Status : **Marked For Review**

Chosen Option : **4**

**Q.12** A letter was sent to the Principal of a school seeking permission for organising a blood donation camp within the school premises. The date and programme schedule, along with the details of the professionals who would assist during the camp have been mentioned.

This type of letter is “\_\_\_\_\_”.

Fill in the blanks with the most appropriate answer:

- Options**
- 1. a formal letter
  - 2. a commissary letter
  - 3. a social letter
  - 4. an informal letter

Question Type : **MCQ**

Question ID : **531002245**

Option 1 ID : **531002947**

Option 2 ID : **531002948**

Option 3 ID : **531002946**

Option 4 ID : **531002945**

Status : **Marked For Review**

Chosen Option : **1**



**Q.13** Choose the correct meaning of the underlined idiom.

At Christmas, even the elderly paint the town red.

- Options
1. indulge in rioting
  2. spill red wine
  3. have a lively time
  4. paint the house red

Question Type : **MCQ**

Question ID : **531002239**

Option 1 ID : **531002921**

Option 2 ID : **531002923**

Option 3 ID : **531002924**

Option 4 ID : **531002922**

Status : **Marked For Review**

Chosen Option : **3**

**Q.14** From the following sentences, choose the most appropriate option to change the given sentence from Active Voice to its Passive Voice form. If none of the provided options is correct, choose option no. 4.

It is time to write the D.O. letter.

- Options
1. Tell him that it is the time for the D.O. letter to be written
  2. None of the above
  3. The D.O. letter is to be written on time.
  4. It is time for the D.O. letter to be written.

Question Type : **MCQ**

Question ID : **531002219**

Option 1 ID : **531002843**

Option 2 ID : **531002844**

Option 3 ID : **531002841**

Option 4 ID : **531002842**

Status : **Marked For Review**

Chosen Option : **4**

**Q.15** Choose the most appropriate antonym of the word '**exalt**' from the options given below:

- Options
1. rusticate
  2. deprecate
  3. elevate
  4. glorify

Question Type : **MCQ**

Question ID : **531002236**

Option 1 ID : **531002912**

Option 2 ID : **531002909**

Option 3 ID : **531002910**

Option 4 ID : **531002911**

Status : **Marked For Review**

Chosen Option : **1**

**Q.16** Choose the option which correctly translates the given sentence from Hindi to English:

सारा फर्नीचर नए मालिक द्वारा बदल दिया गया है।

**Options** 1. The new owner is bent on replacing all the furniture.

2. All the furniture will be replaced by the new owner.

3. The furniture has been replaced by the previous owner.

4. All the furniture has been replaced by the new owner.

Question Type : **MCQ**

Question ID : **531002248**

Option 1 ID : **531002959**

Option 2 ID : **531002958**

Option 3 ID : **531002960**

Option 4 ID : **531002957**

Status : **Marked For Review**

Chosen Option : **4**

**Q.17** Choose the appropriate synonym for 'wicked' from the list of words given below:

**Options** 1. vicious

2. virtuous

3. wilt

4. wither

Question Type : **MCQ**

Question ID : **531002235**

Option 1 ID : **531002906**

Option 2 ID : **531002905**

Option 3 ID : **531002907**

Option 4 ID : **531002908**

Status : **Not Answered**

Chosen Option : **--**

**Q.18** Choose the option which correctly translates the given sentence from Hindi to English:

पिता की सम्पत्ति उनकी मृत्यु से पहले उनके बच्चों के बीच समान रूप से विभाजित की गई ।

**Options** 1. Brother and sister got equal rights to the father's property.

2. The father's property was divided equally among his children before his death.

3. The father's property is yet to be divided awaiting his death.

4. The siblings equally divided their father's property.

Question Type : **MCQ**

Question ID : **531002247**

Option 1 ID : **531002954**

Option 2 ID : **531002955**

Option 3 ID : **531002956**

Option 4 ID : **531002953**

Status : **Marked For Review**

Chosen Option : **2**

Q.19 Match the foreign words in **List-I** with their meaning in **List-II**

LIST-I		LIST-II	
A.	<i>sui generis</i>	I.	from the very beginning
B.	<i>suo moto</i>	II.	one of a kind
C.	<i>lingua franca</i>	III.	common language spoken by people
D.	<i>ab initio</i>	IV.	on one's own

Choose the **correct** answer from the options given below:

- Options
1. A-IV, B-III, C-II, D-I
  2. A-III, B-II, C-IV, D-I
  3. A-II, B-IV, C-III, D-I
  4. A-IV, B-II, C-III, D-I

Question Type : **MCQ**

Question ID : **531002241**

Option 1 ID : **531002932**

Option 2 ID : **531002929**

Option 3 ID : **531002931**

Option 4 ID : **531002930**

Status : **Not Answered**

Chosen Option : --

Q.20 The term "Vox Populi" signifies what and from which language has the term been taken into English?

- Options
1. Common thought; German
  2. a Spanish Brand; Spanish
  3. Common thought; Greek
  4. Voice of the people; Latin

Question Type : **MCQ**

Question ID : **531002243**

Option 1 ID : **531002937**

Option 2 ID : **531002938**

Option 3 ID : **531002939**

Option 4 ID : **531002940**

Status : **Not Answered**

Chosen Option : --



**Q.21** Choose the option with the **correct** spelling:

- Options 1. infulltrate  
2. infiltrate  
3. infiltrat  
4. infilltrate

Question Type : **MCQ**

Question ID : **531002232**

Option 1 ID : **531002894**

Option 2 ID : **531002895**

Option 3 ID : **531002896**

Option 4 ID : **531002893**

Status : **Not Answered**

Chosen Option : --

**Q.22** Rearrange the following phrases to form a grammatically correct and coherent sentence:

- A. remains to be seen  
B. older people inherently face fewer brain challenges in their everyday life  
C. or if it is simply that  
D. whether this is due to brain changes with age

- Options 1. D – C – B – A  
2. A – B – C – D  
3. B – C – A – D  
4. B – A – C – D

Question Type : **MCQ**

Question ID : **531002230**

Option 1 ID : **531002887**

Option 2 ID : **531002885**

Option 3 ID : **531002888**

Option 4 ID : **531002886**

Status : **Not Answered**

Chosen Option : --

**Q.23** Fill in the blanks with suitable articles.

\_\_\_\_\_ Ganga is considered holy by \_\_\_\_\_ Hindus.

- Options 1. A, a  
2. The, a  
3. The, the  
4. A, the

Question Type : **MCQ**

Question ID : **531002225**

Option 1 ID : **531002866**

Option 2 ID : **531002867**

Option 3 ID : **531002865**

Option 4 ID : **531002868**

Status : **Marked For Review**

Chosen Option : **3**

**Q.24** Select the correct meaning of the idiom, 'hand to mouth', from the options given below:

Options 1. measurement of Body Mass Index

2. the action of eating food
3. to live in poverty and have only enough for basic needs
4. height of a person

Question Type : **MCQ**

Question ID : **531002240**

Option 1 ID : **531002928**

Option 2 ID : **531002926**

Option 3 ID : **531002927**

Option 4 ID : **531002925**

Status : **Not Answered**

Chosen Option : --

**Q.25** Which of the following options correctly describes the word '**carpool**'?

Options 1.

- a group of people who arrange to make a journey in a single car.
2. the action of stealing a car.
3. an accident in which multiple cars are pooled together in a pile-up .
4. vehicular accident leading to the killing of a large number of people.

Question Type : **MCQ**

Question ID : **531002234**

Option 1 ID : **531002901**

Option 2 ID : **531002904**

Option 3 ID : **531002903**

Option 4 ID : **531002902**

Status : **Marked For Review**

Chosen Option : **3**

**Q.26** From the given options, choose the most appropriate pair of prepositions for the following sentence:

He pined \_\_\_\_\_ in the memory \_\_\_\_\_ his departed daughter.

Options 1. on, from

2. with, to
3. away, of
4. from, in

Question Type : **MCQ**

Question ID : **531002226**

Option 1 ID : **531002870**

Option 2 ID : **531002872**

Option 3 ID : **531002871**

Option 4 ID : **531002869**

Status : **Marked For Review**

Chosen Option : **3**

**Q.27** Fill in the blank by choosing the correct idiom from the options given below:  
There is a kind of \_\_\_\_\_ in the fact that the country responsible for the worst ecological disaster of this century is the one suffering the most from its effects.

- Options
1. poetic license
  2. politically correct
  3. poetic justice
  4. point blank

Question Type : **MCQ**  
Question ID : **531002238**  
Option 1 ID : **531002918**  
Option 2 ID : **531002920**  
Option 3 ID : **531002917**  
Option 4 ID : **531002919**  
Status : **Marked For Review**  
Chosen Option : **2**

**Q.28** Identify the error in the underlined part of the given sentence and choose the most appropriate answer from the options provided that rectifies the error:  
Hardly had they reached the auditorium  
than the concert started.

- Options
1. and the concert started.
  2. therefore the concert started.
  3. hence the concert started.
  4. when the concert started.

Question Type : **MCQ**  
Question ID : **531002233**  
Option 1 ID : **531002898**  
Option 2 ID : **531002899**  
Option 3 ID : **531002900**  
Option 4 ID : **531002897**  
Status : **Marked For Review**  
Chosen Option : **4**

**Q.29** Choose the most appropriate option to change the given sentence from Passive Voice to Active Voice:

Milk has been ordered by me fifty-seven times from Quick Mart this year.

- Options
1. I have ordered milk fifty-seven times from Quick Mart this year.
  2. I ordered fifty-seven packets of milk from Quick Mart this year.
  3. I had ordered milk fifty-seven times this year from Quick Mart.
  4. I ordered milk over fifty-seven times throughout the year from Quick Mart.

Question Type : **MCQ**  
Question ID : **531002221**  
Option 1 ID : **531002852**  
Option 2 ID : **531002849**  
Option 3 ID : **531002850**  
Option 4 ID : **531002851**  
Status : **Marked For Review**  
Chosen Option : **1**



Q.30 Choose the option with the **correct** spelling:

- Options
1. embarrass
  2. embarrass
  3. embarras
  4. embrasse

Question Type : **MCQ**

Question ID : **531002231**

Option 1 ID : **531002891**

Option 2 ID : **531002890**

Option 3 ID : **531002889**

Option 4 ID : **531002892**

Status : **Marked For Review**

Chosen Option : 1

Q.31 Match the foreign words in **List-I** with their meaning in **List-II**:

LIST-I		LIST-II	
A.	bona fide	I.	an enthusiastic adherent
B.	faux pas	II.	in fact
C.	aficionado	III.	genuine
D.	de facto	IV.	gaffe

Choose the **correct** answer from the options given below:

- Options
1. A-III, B-IV, C-I, D-II
  2. A-IV, B-III, C-II, D-I
  3. A-I, B-II, C-III, D-IV
  4. A-II, B-III, C-IV, D-I

Question Type : **MCQ**

Question ID : **531002242**

Option 1 ID : **531002935**

Option 2 ID : **531002934**

Option 3 ID : **531002933**

Option 4 ID : **531002936**

Status : **Not Answered**

Chosen Option : --

**Q.32** Convert the following sentence from Indirect Speech to Direct Speech by choosing the correct option.

The girl exclaimed that it was a lovely house.

- Options**
1. The girl said, "What a lovely house!"
  2. "What a lovely house!" he exclaimed.
  3. The girl said, "What a lovely house it is!"
  4. "Isn't it a lovely house?" the girl said.

Question Type : **MCQ**

Question ID : **531002223**

Option 1 ID : **531002859**

Option 2 ID : **531002857**

Option 3 ID : **531002858**

Option 4 ID : **531002860**

Status : **Marked For Review**

Chosen Option : **3**

**Q.33** Choose the most appropriate option to rearrange the jumbled parts of the given sentence in proper sequence to make a meaningful sentence.

- A. in the number of approved insurance claims
- B. the CEO of a big insurance firm
- C. we witnessed an increase
- D. after an armed vigilante shot

- Options**
1. A – C – B – D
  2. D – A – B – C
  3. D – B – C – A
  4. C – D – B – A

Question Type : **MCQ**

Question ID : **531002228**

Option 1 ID : **531002877**

Option 2 ID : **531002879**

Option 3 ID : **531002878**

Option 4 ID : **531002880**

Status : **Not Answered**

Chosen Option : **--**

**Q.34** Which of the following subscriptions is NOT appropriate for an informal letter to a very close friend?

- Options**
1. Yours affectionately
  2. Yours truly
  3. Your obediently
  4. With warm wishes

Question Type : **MCQ**

Question ID : **531002246**

Option 1 ID : **531002949**

Option 2 ID : **531002950**

Option 3 ID : **531002952**

Option 4 ID : **531002951**

Status : **Marked For Review**

Chosen Option : **3**

**Q.35** Convert the following sentence from Indirect Speech to Direct Speech by choosing the correct option.

She ordered me to go and shut the door.

- Options**
1. "Let the door be shut", she ordered.
  2. "Go and shut the door," she said.
  3. She said, "Please go shut the door".
  4. She shouted, "Go shut the door".

Question Type : **MCQ**

Question ID : **531002224**

Option 1 ID : **531002862**

Option 2 ID : **531002861**

Option 3 ID : **531002864**

Option 4 ID : **531002863**

Status : **Marked For Review**

Chosen Option : **2**

**Q.36** Convert the following sentence from Direct Speech to Indirect Speech by choosing the correct option.

Zuigi said, "May I have some fries?"

- Options**
1. Zuigi asked if he might have some fries.
  2. Zuigi wanted to have some fries.
  3. Zuigi asked if he may have some fries.
  4. Zuigi asked to be given some fries.

Question Type : **MCQ**

Question ID : **531002222**

Option 1 ID : **531002854**

Option 2 ID : **531002853**

Option 3 ID : **531002856**

Option 4 ID : **531002855**

Status : **Marked For Review**

Chosen Option : **1**

**Q.37** By choosing the most appropriate option, rearrange the jumbled part of the sentence in proper sequence to make a meaningful sentence.

- A. as a magic plant
- B. to keep them healthy
- C. the natives of Masaba regarded the fern
- D. because of its ability

Choose the **correct** answer from the options given below:

- Options**
1. C – A – D – B
  2. A – C – D – B
  3. B – D – C – A
  4. C – D – B – A

Question Type : **MCQ**

Question ID : **531002229**

Option 1 ID : **531002884**

Option 2 ID : **531002882**

Option 3 ID : **531002883**

Option 4 ID : **531002881**

Status : **Marked For Review**

Chosen Option : **4**



**Q.38** Fill in the blank in the given sentence using the most appropriate modal from the options given below.

"It's going to be grander than the Great Gatsby's Party. Oh, I insist, you \_\_\_\_\_ come."

- Options
1. might
  2. must
  3. would
  4. need

Question Type : **MCQ**  
Question ID : **531002227**  
Option 1 ID : **531002875**  
Option 2 ID : **531002874**  
Option 3 ID : **531002873**  
Option 4 ID : **531002876**  
Status : **Marked For Review**  
Chosen Option : **2**

**Q.39** Choose the most appropriate antonym for 'yearn' from the words listed below:

- Options
1. be content
  2. condition
  3. be confined
  4. connect

Question Type : **MCQ**  
Question ID : **531002237**  
Option 1 ID : **531002916**  
Option 2 ID : **531002913**  
Option 3 ID : **531002914**  
Option 4 ID : **531002915**  
Status : **Not Answered**  
Chosen Option : **--**

**Q.40** Choose the appropriate Passive Voice form of the given sentence from the options given below.

What are you reading these days?

- Options
1. What do you read these days?
  2. What had you read those days?
  3. These days what will you read?
  4. What is being read by you these days?

Question Type : **MCQ**  
Question ID : **531002220**  
Option 1 ID : **531002845**  
Option 2 ID : **531002848**  
Option 3 ID : **531002847**  
Option 4 ID : **531002846**  
Status : **Marked For Review**  
Chosen Option : **4**

**Q.41** Geeta and Rahul are working in a boutique. Their combined monthly salary amounts to ₹ 30,000. Geeta spends 80% of her salary and Rahul spends 70% of his salary. If their savings are equal in amount, what is the salary of Geeta?

- Options 1. ₹ 18,000  
2. ₹ 15,000  
3. ₹ 12,000  
4. ₹ 24,000

Question Type : **MCQ**

Question ID : **531002251**

Option 1 ID : **531002969**

Option 2 ID : **531002971**

Option 3 ID : **531002970**

Option 4 ID : **531002972**

Status : **Not Attempted and  
Marked For Review**

Chosen Option : --

**Q.42** Find the median class of the following data:

Marks obtained (C.I)	Frequency
0-10	8
10-20	10
20-30	12
30-40	22
40-50	30
50-60	18

- Options 1. 50-60  
2. 20-30  
3. 30-40  
4. 40-50

Question Type : **MCQ**

Question ID : **531002261**

Option 1 ID : **5310021012**

Option 2 ID : **5310021009**

Option 3 ID : **5310021010**

Option 4 ID : **5310021011**

Status : **Marked For Review**

Chosen Option : **4**

**Q.43** The intersection point on the Y-axis of line  $5x+8y=3$ , is

- Options
1.  $(3/8, 0)$
  2.  $(8/3, 0)$
  3.  $(0, 3/8)$
  4.  $(0, 8/3)$

Question Type : **MCQ**

Question ID : **531002257**

Option 1 ID : **531002995**

Option 2 ID : **531002996**

Option 3 ID : **531002993**

Option 4 ID : **531002994**

Status : **Marked For Review**

Chosen Option : **3**

**Q.44** A person travelled a distance of 60 km in 8 hours. He travelled partly on foot at 4 km/h and partly on bicycle at 12 km/h. The distance travelled on foot is:

- Options
1. 25 km
  2. 20 km
  3. 22 km
  4. 18 km

Question Type : **MCQ**

Question ID : **531002266**

Option 1 ID : **5310021032**

Option 2 ID : **5310021030**

Option 3 ID : **5310021031**

Option 4 ID : **5310021029**

Status : **Not Attempted and  
Marked For Review**

Chosen Option : **--**

**Q.45** An employee wishes to reach his office, which is 27 km away, in 48 min. He covers one-third of the distance in 12 min. What must his speed be so that he is able to cover the remaining distance in the remaining time?

- Options
1. 30 km/h
  2. 20 km/h
  3. 15 km/h
  4. 10 km/h

Question Type : **MCQ**

Question ID : **531002265**

Option 1 ID : **5310021027**

Option 2 ID : **5310021028**

Option 3 ID : **5310021026**

Option 4 ID : **5310021025**

Status : **Not Attempted and  
Marked For Review**

Chosen Option : **--**

**Q.46** At what rate of simple (annual) interest does a sum of money double itself in 12 years ?

- Options
1. 8.8%
  2. 7.9%
  3. 7.5%
  4. 8.3%

Question Type : **MCQ**

Question ID : **531002254**

Option 1 ID : **531002981**

Option 2 ID : **531002984**

Option 3 ID : **531002982**

Option 4 ID : **531002983**

Status : **Not Attempted and  
Marked For Review**

Chosen Option : --

**Q.47** 27 cubes having side 2 cm are joined together to form a bigger cube. The surface area of the resulting cube is:

- Options
1.  $216 \text{ cm}^2$
  2.  $64 \text{ cm}^2$
  3.  $512 \text{ cm}^2$
  4.  $108 \text{ cm}^2$

Question Type : **MCQ**

Question ID : **531002260**

Option 1 ID : **5310021005**

Option 2 ID : **5310021007**

Option 3 ID : **5310021008**

Option 4 ID : **5310021006**

Status : **Not Attempted and  
Marked For Review**

Chosen Option : --

**Q.48** A card is drawn from a well-shuffled pack of cards. The probability of getting a black card or a queen is:

- Options
1.  $\frac{4}{13}$
  2.  $\frac{15}{26}$
  3.  $\frac{7}{13}$
  4.  $\frac{1}{26}$

Question Type : **MCQ**

Question ID : **531002262**

Option 1 ID : **5310021014**

Option 2 ID : **5310021013**

Option 3 ID : **5310021015**

Option 4 ID : **5310021016**

Status : **Marked For Review**

Chosen Option : **2**



**Q.49** If in one day, 4 women and 7 boys working together can do five times as much work as a woman and a boy can do in a day. Then, the ratio of working capacity of a woman to a boy is:

- Options 1. **2:1**  
2. 3:1  
3. 1:2  
4. 1:3

Question Type : **MCQ**  
Question ID : **531002267**  
Option 1 ID : **5310021036**  
Option 2 ID : **5310021034**  
Option 3 ID : **5310021033**  
Option 4 ID : **5310021035**  
Status : **Not Answered**  
Chosen Option : --

**Q.50** A and B together can knit a sweater in 10 days and A alone can knit it in 15 days. In how many days can B alone knit a sweater?

- Options 1. **20 days**  
2. 30 days  
3. 25 days  
4. 27.5 days

Question Type : **MCQ**  
Question ID : **531002268**  
Option 1 ID : **5310021039**  
Option 2 ID : **5310021038**  
Option 3 ID : **5310021037**  
Option 4 ID : **5310021040**  
Status : **Not Answered**  
Chosen Option : --

**Q.51** A dishonest milk-vendor has a vessel filled with 50 L of milk. From which he has taken out 5 L of milk and replaced it with same quantity of water. This process has been further repeated 2 times. How much is the quantity of pure milk that is now contained in the vessel?

- Options 1. **40 L**  
2. 35 L  
3. 36.45 L  
4. 41.35 L

Question Type : **MCQ**  
Question ID : **531002250**  
Option 1 ID : **531002967**  
Option 2 ID : **531002965**  
Option 3 ID : **531002966**  
Option 4 ID : **531002968**  
Status : **Not Answered**  
Chosen Option : --

**Q.52** Monika, a fashion designer buys 5 scarfs and 2 bags for ₹ 3700. Her friend Asha buys 3 scarfs and one bag of the same kind for ₹ 2000. What is the total cost of 3 bags?

- Options
1. ₹ 2550
  2. ₹ 3300
  3. ₹ 1850
  4. ₹ 1100

Question Type : **MCQ**

Question ID : **531002255**

Option 1 ID : **531002987**

Option 2 ID : **531002985**

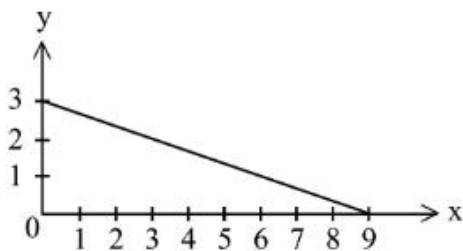
Option 3 ID : **531002986**

Option 4 ID : **531002988**

Status : **Marked For Review**

Chosen Option : **2**

**Q.53** In x-y axis graph, which linear equation would plot as follows?



- Options
1.  $x+y=6$
  2.  $y=x+3$
  3.  $x+3y=9$
  4.  $x=y+12$

Question Type : **MCQ**

Question ID : **531002256**

Option 1 ID : **531002990**

Option 2 ID : **531002989**

Option 3 ID : **531002992**

Option 4 ID : **531002991**

Status : **Not Answered**

Chosen Option : **--**

**Q.54** From among 150 members in a club, one President and one Vice-president are to be appointed. In how many ways can this be done?

- Options
1. 11250
  2. 22500
  3. 11175
  4. 22350

Question Type : **MCQ**

Question ID : **531002263**

Option 1 ID : **5310021017**

Option 2 ID : **5310021020**

Option 3 ID : **5310021018**

Option 4 ID : **5310021019**

Status : **Marked For Review**

Chosen Option : **2**

**Q.55** Two vertices of a triangle are  $(5, -3)$  and  $(0, 4)$ . If the centroid of the triangle is  $(2, 3)$  then the third vertex is:

- Options
1.  $(1, 8)$
  2.  $(3.5, 2)$
  3.  $(3, 2)$
  4.  $(2.5, 1.5)$

Question Type : **MCQ**

Question ID : **531002258**

Option 1 ID : **5310021000**

Option 2 ID : **531002999**

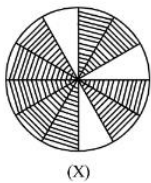
Option 3 ID : **531002997**

Option 4 ID : **531002998**

Status : **Not Answered**

Chosen Option : --

**Q.56** A circular design of radius 14 cm has 12 equal sectors as shown in figure (X). The area of shaded region is:



- Options
1.  $231 \text{ cm}^2$
  2.  $308 \text{ cm}^2$
  3.  $924 \text{ cm}^2$
  4.  $462 \text{ cm}^2$

Question Type : **MCQ**

Question ID : **531002259**

Option 1 ID : **5310021004**

Option 2 ID : **5310021003**

Option 3 ID : **5310021001**

Option 4 ID : **5310021002**

Status : **Not Answered**

Chosen Option : --

**Q.57** Preeti invested in a startup of kids ethnic-wear. The cost of making an ethnic-wear depends on three items – fabric, tailoring and designing. The cost of these items are in the ratio 5:3:1 respectively. If the cost of tailoring for each piece is ₹ 150, find the cost of single piece of ethnic-wear?

- Options
1. ₹ 600
  2. ₹ 750
  3. ₹ 450
  4. ₹ 900

Question Type : **MCQ**

Question ID : **531002249**

Option 1 ID : **531002964**

Option 2 ID : **531002961**

Option 3 ID : **531002963**

Option 4 ID : **531002962**

Status : **Marked For Review**

Chosen Option : **3**

**Q.58** A fashion house is having a clearance sale on trousers. During the first week 40% discount is offered; a subsequent discount of 20% is offered in the second week; and finally in the third week, another 10% discount is offered on the original price in order to clear the stock. Amit bought a trouser on the last day of the sale for ₹ 342. How much would it have cost before the sale?

- Options
1. ₹ 1140
  2. ₹ 900
  3. ₹ 1200
  4. ₹ 850

Question Type : **MCQ**

Question ID : **531002252**

Option 1 ID : **531002973**

Option 2 ID : **531002974**

Option 3 ID : **531002975**

Option 4 ID : **531002976**

Status : **Not Answered**

Chosen Option : --

**Q.59** The compound interest on ₹ 5,000 at 10% per annum for \_\_\_\_\_ (in years) is ₹ 1655.

- Options
1. 3
  2. 4
  3. 3.5
  4. 2.5

Question Type : **MCQ**

Question ID : **531002253**

Option 1 ID : **531002980**

Option 2 ID : **531002978**

Option 3 ID : **531002979**

Option 4 ID : **531002977**

Status : **Marked For Review**

Chosen Option : 1

**Q.60** In how many different ways can the letters of the word DESIGNING be arranged?

- Options
1. 45360
  2. 90720
  3. 15120
  4. 22680

Question Type : **MCQ**

Question ID : **531002264**

Option 1 ID : **5310021021**

Option 2 ID : **5310021022**

Option 3 ID : **5310021023**

Option 4 ID : **5310021024**

Status : **Marked For Review**

Chosen Option : 1



**Q.61** Five shows P, Q, R, S and T are to be staged in a fashion week from Monday to Friday and only one show will be staged on each day. P or R should not be staged in the beginning or end of the week. R should be staged immediately before Q. S should be staged immediately after P. One show is staged between S and T.

Which of the following is the correct sequence of staging from Monday to Friday?

- Options
1. S P T R Q
  2. S R Q P T
  3. T P S R Q
  4. T R P S Q

Question Type : **MCQ**

Question ID : **531002274**

Option 1 ID : **5310021062**

Option 2 ID : **5310021063**

Option 3 ID : **5310021061**

Option 4 ID : **5310021064**

Status : **Marked For Review**

Chosen Option : **3**

**Q.62** Six friends – A, B, C, D, E and F are sitting across the edges of a hexagonal-shaped table facing the centre, such that 'F' is a neighbour of 'B' and 'E', 'C' is not between 'A' and 'D', 'D' and 'E' are sitting opposite to each other, and 'A' is to the immediate right of 'D'. Who would sit to the immediate left of E?

- Options
1. D
  2. C
  3. A
  4. F

Question Type : **MCQ**

Question ID : **531002276**

Option 1 ID : **5310021069**

Option 2 ID : **5310021070**

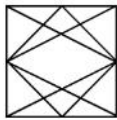
Option 3 ID : **5310021071**

Option 4 ID : **5310021072**

Status : **Marked For Review**


Chosen Option : **2**

**Q.63** Choose the figure from the options which is embedded in the pattern given below:

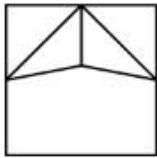


Options


1.



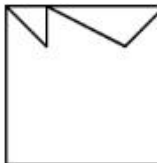
2.



3.



4.



Question Type : **MCQ**

Question ID : **531002270**

Option 1 ID : **5310021046**

Option 2 ID : **5310021045**

Option 3 ID : **5310021047**

Option 4 ID : **5310021048**

Status : **Marked For Review**

Chosen Option : **3**

**Q.64** Six children P, Q, R, S, T and Z are sitting in two rows, three in each, such that a child in one row is exactly facing a child in the other row. A child 'S' is not at the end of any row. While 'T' is left to 'S', and 'S' is facing 'Q'. Also 'Q' is to the right of 'Z', and 'Z' is facing 'P'. Which of the following are in the same row?

Options 1. **TSQ**

2. **ZQT**

3. **QRP and TSZ**

4. **ZQR and PST**

Question Type : **MCQ**

Question ID : **531002277**

Option 1 ID : **5310021076**

Option 2 ID : **5310021073**

Option 3 ID : **5310021075**

Option 4 ID : **5310021074**

Status : **Marked For Review**

Chosen Option : **4**

**Q.65** Pointing towards a girl in the picture, Rashi (a girl) said, “She is the only sister of the son of my brother’s grandfather”. How is Rashi related to the girl in the picture?

- Options
1. Niece
  2. Mother
  3. Cousin
  4. Aunt

Question Type : **MCQ**

Question ID : **531002278**

Option 1 ID : **5310021080**

Option 2 ID : **5310021079**

Option 3 ID : **5310021078**

Option 4 ID : **5310021077**

Status : **Marked For Review**

Chosen Option : **4**

**Q.66** C is the daughter of A; A and B are brothers; F is the father of B and D is the daughter of F. Which of the following statements is/are true?

- A. D is the paternal aunt of C.
- B. B and C are cousins.
- C. C and D are sisters.
- D. A and D are brothers.
- E. B is the paternal uncle of C.

Choose the most appropriate answer from the options given below:

- Options
1. B only
  2. A and C only
  3. A and E only
  4. D only

Question Type : **MCQ**

Question ID : **531002279**

Option 1 ID : **5310021081**

Option 2 ID : **5310021083**

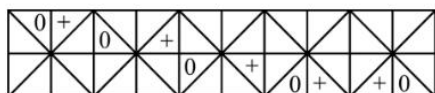
Option 3 ID : **5310021082**

Option 4 ID : **5310021084**

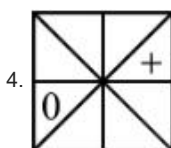
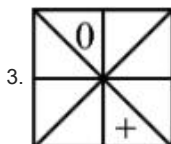
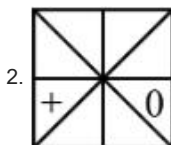
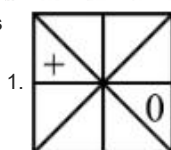
Status : **Marked For Review**

Chosen Option : **3**

**Q.67** Identify the pattern in the following sequence and choose the correct figure from the options below which follows the given sequence.



Options



Question Type : **MCQ**

Question ID : **531002272**

Option 1 ID : **5310021054**

Option 2 ID : **5310021055**

Option 3 ID : **5310021056**

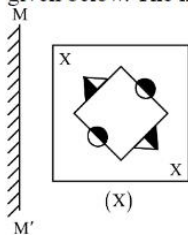
Option 4 ID : **5310021053**

Status : **Marked For Review**

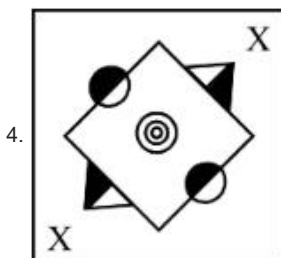
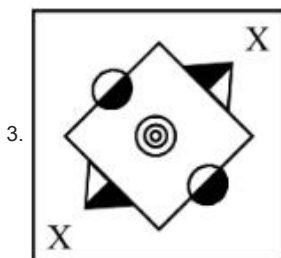
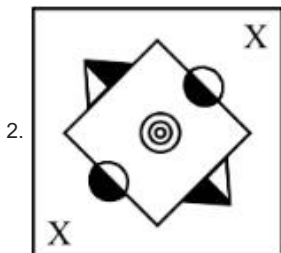
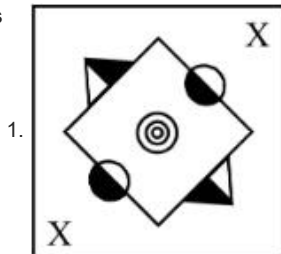
Chosen Option : **2**



**Q.68** Choose the most appropriate mirror image of the given figure (X) from the four alternatives given below. The mirror is represented by MM'



Options



Question Type : **MCQ**

Question ID : **531002281**

Option 1 ID : **5310021092**

Option 2 ID : **5310021089**

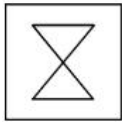
Option 3 ID : **5310021090**

Option 4 ID : **5310021091**

Status : **Marked For Review**

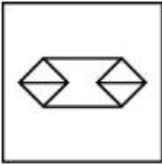
Chosen Option : **4**

**Q.69** Choose one of the alternatives in which the given figure can be embedded:

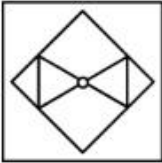


**Options**

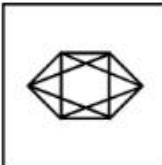
1.



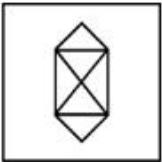
2.



3.



4.



Question Type : **MCQ**

Question ID : **531002269**

Option 1 ID : **5310021041**

Option 2 ID : **5310021043**

Option 3 ID : **5310021044**

Option 4 ID : **5310021042**

Status : **Marked For Review**

Chosen Option : **4**

**Q.70** An accomplished fashion designer, Shreya, specializes in magnificent wedding outfits and accessories. She started a design outlet 3 years ago but her business is unexpectedly moving slow. Through a business consultant, she came to know that people generally consider her store for visiting on special occasions rather than on regular basis. What measures should she incorporate to scale up her business?

- A. Display her latest designs at upcoming bridal exhibition.
- B. Shifting the store to some other place.
- C. Increase online availability of the in-store collection.
- D. Make special discount coupons available on her wedding collections.
- E. Advertise her wide range of collection in the local newspapers.

Choose the most appropriate answer from the options given below:

- Options**
1. A and C only
  2. C and E only
  3. B only
  4. D and E only

Question Type : **MCQ**

Question ID : **531002271**

Option 1 ID : **5310021050**

Option 2 ID : **5310021051**

Option 3 ID : **5310021052**

Option 4 ID : **5310021049**

Status : **Marked For Review**

Chosen Option : **4**

**Q.71** Choose the most appropriate water image of the given object (x) from the following alternatives:



**Options**

- 1.
- 2.
- 3.
- 4.

Question Type : **MCQ**

Question ID : **531002280**

Option 1 ID : **5310021087**

Option 2 ID : **5310021088**

Option 3 ID : **5310021086**

Option 4 ID : **5310021085**

Status : **Marked For Review**

Chosen Option : **3**

**Q.72** Identify the next figure in the following series out of the given alternatives, which will continue the figure series:

×	○	△	×	⊗	△	×	⊗	△	⊗	⊗	⊗	⊗	○	⊗
×	○	△	×	○	⊗	⊗	⊗	⊗	⊗	⊗	⊗	⊗	⊗	△
×	○	△	⊗	○	△	⊗	○	⊗	⊗	⊗	⊗	×	⊗	⊗

Options

1. 

×	○	△
⊗	⊗	△
×	○	⊗
2. 

⊗	○	⊗
×	○	△
×	⊗	△
3. 

×	○	⊗
×	○	△
×	⊗	△
4. 

⊗	○	⊗
×	○	△
×	○	△

Question Type : **MCQ**

Question ID : **531002273**

Option 1 ID : **5310021059**

Option 2 ID : **5310021060**

Option 3 ID : **5310021057**

Option 4 ID : **5310021058**

Status : **Marked For Review**

Chosen Option : **2**

**Q.73** Choose the missing term in the alpha-numeric series:

Z3Y, X5V, T9Q, \_\_\_\_\_, F23A

Options 1. **O 19K**

2. **N 13I**

3. **O 13H**

4. **N 15J**

Question Type : **MCQ**

Question ID : **531002283**

Option 1 ID : **5310021099**

Option 2 ID : **5310021097**

Option 3 ID : **5310021100**

Option 4 ID : **5310021098**

Status : **Not Answered**

Chosen Option : **--**



**Q.74** Choose the missing term out of the given alternatives in the following alpha-numeric series:  
2 U 3, 6 O 9, 10 I 15, 14 E 21, ?

- Options
1. 18 C 27
  2. 18 A 27
  3. 15 C 27
  4. 15 A 27

Question Type : **MCQ**  
Question ID : **531002282**  
Option 1 ID : **5310021094**  
Option 2 ID : **5310021096**  
Option 3 ID : **5310021093**  
Option 4 ID : **5310021095**  
Status : **Marked For Review**  
Chosen Option : **2**

**Q.75** Five persons – A, B, C, D and E scored different marks in an examination. If B scored more marks than D and E only, while C has not scored the highest marks, then who among the following has scored the second highest marks?

- Options
1. B
  2. A
  3. D
  4. C

Question Type : **MCQ**  
Question ID : **531002275**  
Option 1 ID : **5310021067**  
Option 2 ID : **5310021066**  
Option 3 ID : **5310021068**  
Option 4 ID : **5310021065**  
Status : **Marked For Review**  
Chosen Option : **4**

Section : **General Knowledge and Current Affairs**

**Q.76** India's First Fashion Forecasting Initiative is \_\_\_\_\_.

- Options
1. 'VisioNxt'
  2. 'Fashionnext'
  3. Fashionforecast
  4. Visionnext

Question Type : **MCQ**  
Question ID : **531002299**  
Option 1 ID : **5310021162**  
Option 2 ID : **5310021163**  
Option 3 ID : **5310021164**  
Option 4 ID : **5310021161**  
Status : **Marked For Review**  
Chosen Option : **1**

Q.77 **Malmal** is the Indian name for which fabric?

- Options
1. Wool
  2. Nylon
  3. Cotton
  4. Silk

Question Type : **MCQ**

Question ID : **531002287**

Option 1 ID : **5310021115**

Option 2 ID : **5310021116**

Option 3 ID : **5310021114**

Option 4 ID : **5310021113**

Status : **Marked For Review**

Chosen Option : **4**

Q.78 What type of lines adds softness and roundness to a garment?

- Options
1. Vertical
  2. Diagonal
  3. Curved
  4. Horizontal

Question Type : **MCQ**

Question ID : **531002291**

Option 1 ID : **5310021131**

Option 2 ID : **5310021129**

Option 3 ID : **5310021130**

Option 4 ID : **5310021132**

Status : **Not Answered**

Chosen Option : **--**

Q.79 The 10<sup>th</sup> National Handloom Day was celebrated on \_\_\_\_\_.

- Options
1. 27<sup>th</sup> August, 2024
  2. 17<sup>th</sup> October, 2023
  3. 7<sup>th</sup> August, 2024
  4. 7<sup>th</sup> November, 2023

Question Type : **MCQ**

Question ID : **531002300**

Option 1 ID : **5310021168**

Option 2 ID : **5310021165**

Option 3 ID : **5310021167**

Option 4 ID : **5310021166**

Status : **Not Answered**

Chosen Option : **--**

**Q.80** “Statue of Unity” is located on the banks of which river?

- Options
1. Tapti river
  2. Narmada river
  3. Luni river
  4. Chenab river

Question Type : **MCQ**

Question ID : **531002296**

Option 1 ID : **5310021149**

Option 2 ID : **5310021150**

Option 3 ID : **5310021151**

Option 4 ID : **5310021152**

Status : **Not Answered**

Chosen Option : --

**Q.81** Which one is a protein fibre among the below-mentioned fibres?

- Options
1. Silk
  2. Cotton
  3. Jute
  4. Rayon

Question Type : **MCQ**

Question ID : **531002290**

Option 1 ID : **5310021128**

Option 2 ID : **5310021126**

Option 3 ID : **5310021125**

Option 4 ID : **5310021127**

Status : **Marked For Review**

Chosen Option : **3**

**Q.82** Which one among the following is the largest freshwater lake in India?

- Options
1. Lonar lake
  2. Pichola lake
  3. Wullar lake
  4. Chilka lake

Question Type : **MCQ**

Question ID : **531002295**

Option 1 ID : **5310021146**

Option 2 ID : **5310021145**

Option 3 ID : **5310021148**

Option 4 ID : **5310021147**

Status : **Not Answered**

Chosen Option : --

**Q.83** Which of the following is NOT a natural fibre?

- Options
1. Nut Husk Fibres
  2. Bast Fibres
  3. Rayon-Cuprammonium
  4. Animal Secretion

Question Type : **MCQ**

Question ID : **531002298**

Option 1 ID : **5310021159**

Option 2 ID : **5310021158**

Option 3 ID : **5310021157**

Option 4 ID : **5310021160**

Status : **Not Answered**

Chosen Option : --

**Q.84** Match List I with List II

LIST-I Types of Indian Embroidery		LIST-II States	
A.	Kashida	I.	Punjab
B.	Kantha	II.	Kashmir
C.	Kasuti	III.	Karnataka
D.	Phulkari	IV.	Bengal

Choose the **correct** answer from the options given below :

- Options
1. A-II, B-IV, C-III, D-I
  2. A-IV, B-I, C-III, D-II
  3. A-II, B-III, C-IV, D-I
  4. A-I, B-III, C-II, D-IV

Question Type : **MCQ**

Question ID : **531002303**

Option 1 ID : **5310021179**

Option 2 ID : **5310021178**

Option 3 ID : **5310021180**

Option 4 ID : **5310021177**

Status : **Not Answered**

Chosen Option : --

**Q.85** In 1733, the 'Flying Shuttle Loom' was invented by:

- Options
1. John Tobias
  2. John Kay
  3. Sir William Perkin
  4. Elias Howe

Question Type : **MCQ**

Question ID : **531002289**

Option 1 ID : **5310021124**

Option 2 ID : **5310021121**

Option 3 ID : **5310021123**

Option 4 ID : **5310021122**

Status : **Not Answered**

Chosen Option : --



**Q.86** The “The Hay Wain”, which depicts a rural scenery has been painted by which one of the following:

- Options
1. John Constable
  2. Denmark
  3. Leonardo da Vinci
  4. John Eric

Question Type : **MCQ**  
Question ID : **531002294**  
Option 1 ID : **5310021141**  
Option 2 ID : **5310021143**  
Option 3 ID : **5310021144**  
Option 4 ID : **5310021142**  
Status : **Not Answered**  
Chosen Option : --

**Q.87** Which colours are tints and shade of one colour?

- Options
1. monolithic colours
  2. dichromatic colours
  3. monochromatic colours
  4. biochromatic colours

Question Type : **MCQ**  
Question ID : **531002302**  
Option 1 ID : **5310021176**  
Option 2 ID : **5310021173**  
Option 3 ID : **5310021175**  
Option 4 ID : **5310021174**  
Status : **Marked For Review**  
Chosen Option : **3**

**Q.88** Who is the author of the novel “Pride and Prejudice”?

- Options
1. Mary Shelly
  2. Emily Bronte
  3. Charles Dicken
  4. Jane Austen

Question Type : **MCQ**  
Question ID : **531002305**  
Option 1 ID : **5310021188**  
Option 2 ID : **5310021186**  
Option 3 ID : **5310021187**  
Option 4 ID : **5310021185**  
Status : **Marked For Review**  
Chosen Option : **3**

**Q.89** How many Rajya Sabha members are nominated by the President of India?

- Options
1. 18
  2. 15
  3. 12
  4. 20

Question Type : **MCQ**

Question ID : **531002307**

Option 1 ID : **5310021193**

Option 2 ID : **5310021196**

Option 3 ID : **5310021195**

Option 4 ID : **5310021194**

Status : **Not Answered**

Chosen Option : --

**Q.90** Which of the following is a cottage industry?

- Options
1. Handicraft
  2. Sugar
  3. Cement
  4. Automobile

Question Type : **MCQ**

Question ID : **531002297**

Option 1 ID : **5310021153**

Option 2 ID : **5310021155**

Option 3 ID : **5310021156**

Option 4 ID : **5310021154**

Status : **Marked For Review**

Chosen Option : 2

**Q.91** The Governor of a State is appointed by the \_\_\_\_\_.

- Options
1. Chief Justice
  2. President
  3. Vice President
  4. Chief Minister

Question Type : **MCQ**

Question ID : **531002306**

Option 1 ID : **5310021191**

Option 2 ID : **5310021189**

Option 3 ID : **5310021190**

Option 4 ID : **5310021192**

Status : **Marked For Review**

Chosen Option : 2

**Q.92** Ozone layer protects us from which of the following rays?

- Options
1. Infrared rays
  2. Radio rays
  3. Ultraviolet rays
  4. X-ray

Question Type : **MCQ**

Question ID : **531002293**

Option 1 ID : **5310021138**

Option 2 ID : **5310021139**

Option 3 ID : **5310021137**

Option 4 ID : **5310021140**

Status : **Marked For Review**

Chosen Option : **3**

**Q.93** The 25<sup>th</sup> Indian State to achieve statehood was \_\_\_\_\_.

- Options
1. Sikkim
  2. Mizoram
  3. Goa
  4. Arunachal Pradesh

Question Type : **MCQ**

Question ID : **531002308**

Option 1 ID : **5310021197**

Option 2 ID : **5310021199**

Option 3 ID : **5310021200**

Option 4 ID : **5310021198**

Status : **Marked For Review**

Chosen Option : **2**

**Q.94** A decorative pin or brooch used to hold the ends of a garment at the shoulder by the Greeks and the Romans is called -

- Options
1. Fibula
  2. Chilton
  3. Mauli
  4. Haik

Question Type : **MCQ**

Question ID : **531002288**

Option 1 ID : **5310021117**

Option 2 ID : **5310021118**

Option 3 ID : **5310021120**

Option 4 ID : **5310021119**

Status : **Not Answered**

Chosen Option : **--**

**Q.95** The term used for silver and gold metal embroidery is:

- Options
1. Zardozi
  2. Phulkari
  3. Kashida
  4. Chikankari

Question Type : **MCQ**

Question ID : **531002301**

Option 1 ID : **5310021172**

Option 2 ID : **5310021171**

Option 3 ID : **5310021169**

Option 4 ID : **5310021170**

Status : **Marked For Review**

Chosen Option : **1**

**Q.96** Which one of the following is an elastomeric fibre?

- Options
1. Nylon
  2. Modacrylic
  3. Spandex
  4. Acrylic

Question Type : **MCQ**

Question ID : **531002292**

Option 1 ID : **5310021135**

Option 2 ID : **5310021134**

Option 3 ID : **5310021136**

Option 4 ID : **5310021133**

Status : **Marked For Review**

Chosen Option : **3**

**Q.97** Vasco Da Gama's discovery of the sea route via the Cape of Good Hope in the 15<sup>th</sup> Century enhanced India's trade with \_\_\_\_\_.

- Options
1. Russia
  2. England
  3. America
  4. China

Question Type : **MCQ**

Question ID : **531002284**

Option 1 ID : **5310021104**

Option 2 ID : **5310021103**

Option 3 ID : **5310021101**

Option 4 ID : **5310021102**

Status : **Not Answered**

Chosen Option : **--**

**Q.98** The ' Pochampally Ikat' saree is related to which state of India?

- Options
1. Tamil Nadu
  2. Maharashtra
  3. Andhra Pradesh
  4. Telangana

Question Type : **MCQ**

Question ID : **531002285**

Option 1 ID : **5310021107**

Option 2 ID : **5310021106**

Option 3 ID : **5310021108**

Option 4 ID : **5310021105**

Status : **Marked For Review**

Chosen Option : **4**

**Q.99** The Upper Subansiri district that shares its border with Tibet in the North is located in \_\_\_\_\_.

- Options
1. Meghalaya
  2. Mizoram
  3. Manipur
  4. Central Arunachal

Question Type : **MCQ**

Question ID : **531002286**

Option 1 ID : **5310021109**

Option 2 ID : **5310021112**

Option 3 ID : **5310021111**

Option 4 ID : **5310021110**

Status : **Not Answered**

Chosen Option : **--**

**Q.100** Who is the author of the novel “The Color Purple”?

- Options
1. Emily Bronte
  2. Philip K. Dick
  3. Alice Walker
  4. Langston Hughes

Question Type : **MCQ**

Question ID : **531002304**

Option 1 ID : **5310021184**

Option 2 ID : **5310021182**

Option 3 ID : **5310021183**

Option 4 ID : **5310021181**

Status : **Marked For Review**

Chosen Option : **1**